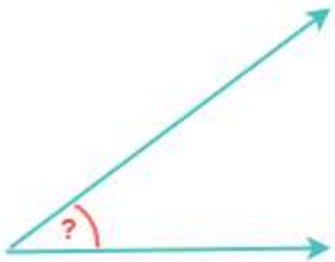


## Angles

Solve the questions

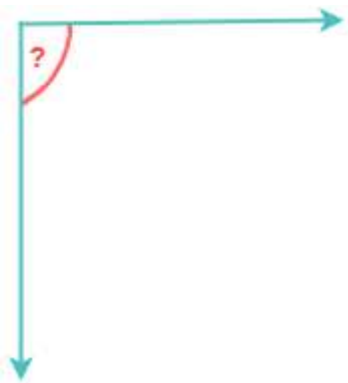
Write the name of the angle for each of the following figures.

1)



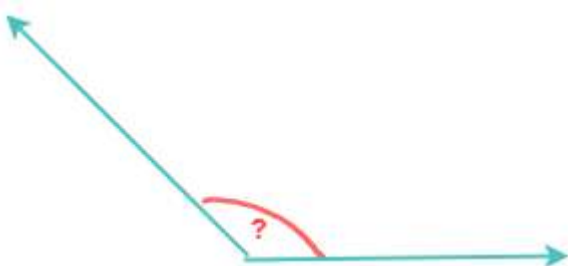
\_\_\_\_\_

2)



\_\_\_\_\_

3)



\_\_\_\_\_

4)



\_\_\_\_\_

5)



\_\_\_\_\_